

# Writing Compound Inequalities from a Number Line

Eighth Grade - Linear Functions, Inequalities and Graphing - Inequalities on a Number Line - WKS-20

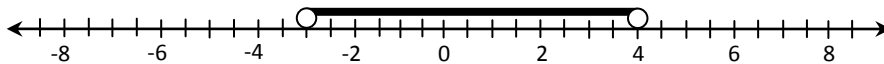
Name \_\_\_\_\_

Date \_\_\_\_/\_\_\_\_/\_\_\_\_

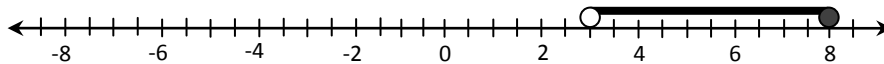
Period \_\_\_\_\_ Score \_\_\_\_\_

Given the graph, write its inequality.

1. \_\_\_\_\_



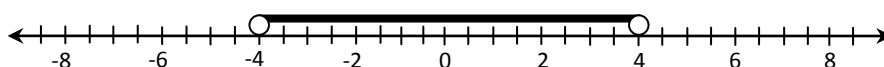
2. \_\_\_\_\_



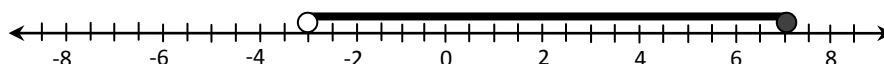
3. \_\_\_\_\_



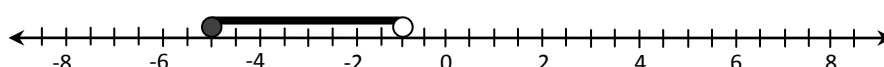
4. \_\_\_\_\_



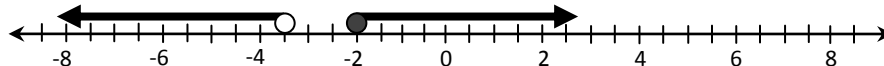
5. \_\_\_\_\_



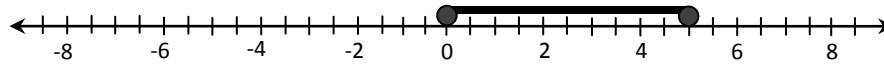
6. \_\_\_\_\_



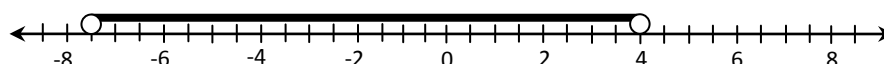
7. \_\_\_\_\_



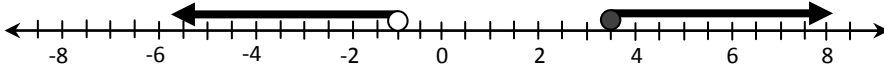
8. \_\_\_\_\_



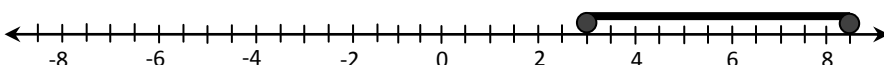
9. \_\_\_\_\_



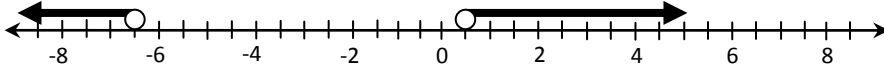
10. \_\_\_\_\_



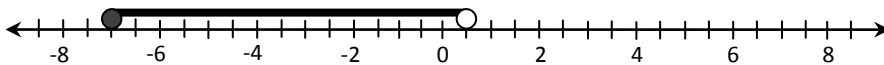
11. \_\_\_\_\_



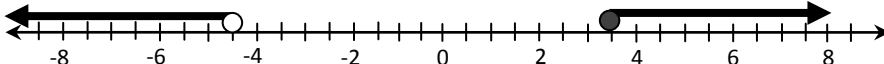
12. \_\_\_\_\_



13. \_\_\_\_\_



14. \_\_\_\_\_



15. \_\_\_\_\_

