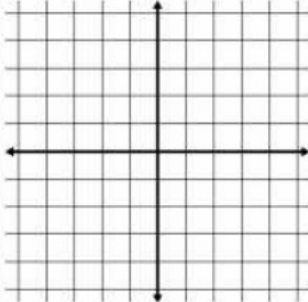


Sketch a graph of the following functions

$$y = 2 \cdot 0.4^x$$



1) Determine the domain and range

$$D: (-\infty, \infty)$$

2) Is the function even, odd or undefined for $x < 0$ [?] [?] or neither

3) Intervals of Increase or Decrease

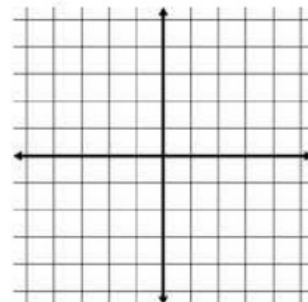
4) Find any extrema.

5) Determine the end behavior

6) Find any asymptotes

7) Intervals of Concavity

$$y = 3e^{-x}$$



1) Determine the domain and range

2) Is the function even, odd or undefined for $x < 0$

3) Intervals of Increase or Decrease

4) Find any extrema.

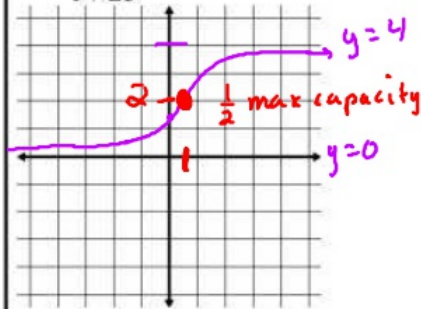
5) Determine the end behavior

6) Find any asymptotes

7) Intervals of Concavity

Sketch a graph of the following functions

$$y = \frac{4}{1+2e^{-x}}$$



1) Determine the minimum and Maximum capacity (Horizontal Asy)

2) Determine the y-intercept

3) Determine the domain and range

4) Intervals of Increase or Decrease

5) Determine the end behavior

6) Find any asymptotes

7) Determine Half the max capacity

8) Intervals of Concavity

$$y = \frac{4}{1+2e^x}$$



1) Determine the minimum and Maximum capacity (Horizontal Asy)

2) Determine the y-intercept

3) Determine the domain and range

4) Intervals of Increase or Decrease

5) Determine the end behavior

6) Find any asymptotes

7) Determine Half the max capacity

8) Intervals of Concavity

concave up
 $(-\infty, .693)$
 down
 $(.693, \infty)$

PRE-CALCULUS: by Finney, Demana, Watts and Kennedy
 Chapter 3: Exponential, Logistic, and Logarithmic Functions
 3.3: Logarithmic Functions and their graphs

Page 15

What you'll Learn About

Changing between Logarithmic and exponential form:

If $x > 0$, $b > 0$ and $b \neq 1$, then
 $y = \log_b x$ if and only if
 $b^y = x$

Properties:

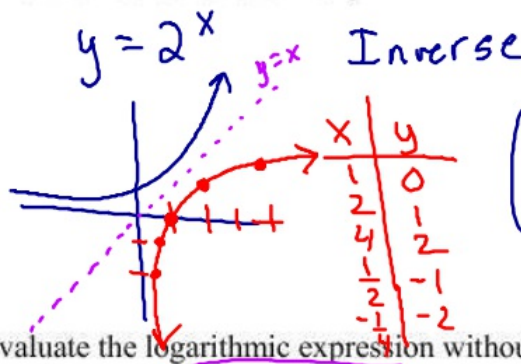
If $x > 0$, $b > 0$, $b \neq 1$, and any real number y

- $\log_b 1 = 0$ because $b^0 = 1$
- $\log_b b = 1$ because $b^1 = b$
- $\log_b b^y = y$ because $b^y = b^y$
- $b^{\log_b x} = x$ because

$$\log_b x = \log_b y$$

5 to what power is $\frac{1}{25}$

Find the inverse function for $y = 2^x$



$$x = 2^y$$

$$y = \log_2 x$$

Evaluate the logarithmic expression without using a calculator

a) $\log_2 8 = 3$

Finding the power

$$\log_2 8 = y$$

$$2^y = 8$$

c) $\log_5 \frac{1}{25} = -2$

$$\log_5 \frac{1}{25} = y$$

$$5^y = \frac{1}{25} \quad (y = -2)$$

e) $\log_7 7 = 1$

$$7^y = 7$$

$$y = 1$$

b) $\log_3 \sqrt{3} =$

$$\log_3 (3^{1/2}) = y$$

$$3^y = 3^{1/2}$$

$$y = \frac{1}{2}$$

d) $\log_4 1 = 0$

$$\log_4 1 = y$$

$$4^y = 1$$

$$y = 0$$

$$\log_e x = \ln x$$

Evaluate the logarithmic expression without using a calculator

a) $\log_{10} 100 =$

$$\log_{10} 100 = y \quad (y=2)$$

$$10^y = 100$$

b) $\log_{10} \sqrt[5]{10} =$

$$\log_{10} 10^{1/5} = \left(\frac{1}{5}\right)$$

$$10^y = 10^{1/5}$$

c) $\log_{10} \frac{1}{100} =$

$$\log_{10} \frac{1}{100} = y$$

$$10^y = \frac{1}{100}$$

d) $\ln \sqrt{e} =$

Natural log of \sqrt{e}

$$\ln e^{\sqrt{e}} = y \quad e^y = e^{1/2}$$

$$y = \frac{1}{2}$$

e) $\ln e^5 =$

$$\ln e^5 = 5$$

f) $\ln \sqrt[5]{e} =$

$$\ln \sqrt[5]{e} = \frac{1}{5}$$

Evaluate the logarithmic expression without using a calculator

a) $6^{\log_6 11} =$

$$6^{\log_6 11} = 11$$

b) $10^{\log_{10} 6} =$

$$10^{\log_{10} 6} = 6$$

c) $e^{\ln 4} =$

$$e^{\ln 4} = 4$$

$$\log_{10} 10^{-2}$$

$$10^y = 10^{-2}$$

$$\log_6 11$$

$$6^y = 11$$

Use a calculator to evaluate the logarithmic expression if it is defined and check your result by evaluating the corresponding exponential expression

a) $\log 34.5 = 1.537$

$$10^{1.537} = 34.5$$

b) $\log 0.43 =$

c) $\log (-3) =$

No Solution

$$10^y = -3$$

you can't take logarithms of 0 and neg #'s

d) $\ln 23.5 = 3.157$

$$e^{3.157} = 23.5$$

e) $\ln 0.48 =$

f) $\ln(-5) =$

No Solution

Solve the equation

a) $\log x = 3$

$$\log_{10} x = 3$$

$$10^3 = x$$

$$1000 = x$$

b) $\log_2 x = 5$

$$\log_2 x = 5$$

$$2^5 = x$$

$$32 = x$$