

Chapter 7

Review Video

p. 386 #4 $v(t) = 6t^2 - 18t + 12$ $0 \leq t \leq 2$

- a. Determine when the particle is moving to the right, to the left, and stopped

p. 386 #4 $v(t) = 6t^2 - 18t + 12$ $0 \leq t \leq 2$

b. Find the particle's displacement for the given time interval.

p. 386 #4

$$v(t) = 6t^2 - 18t + 12$$

$$0 \leq t \leq 2$$

c. If $s(0) = 3$, what is the particle's final position?

p. 386 #4

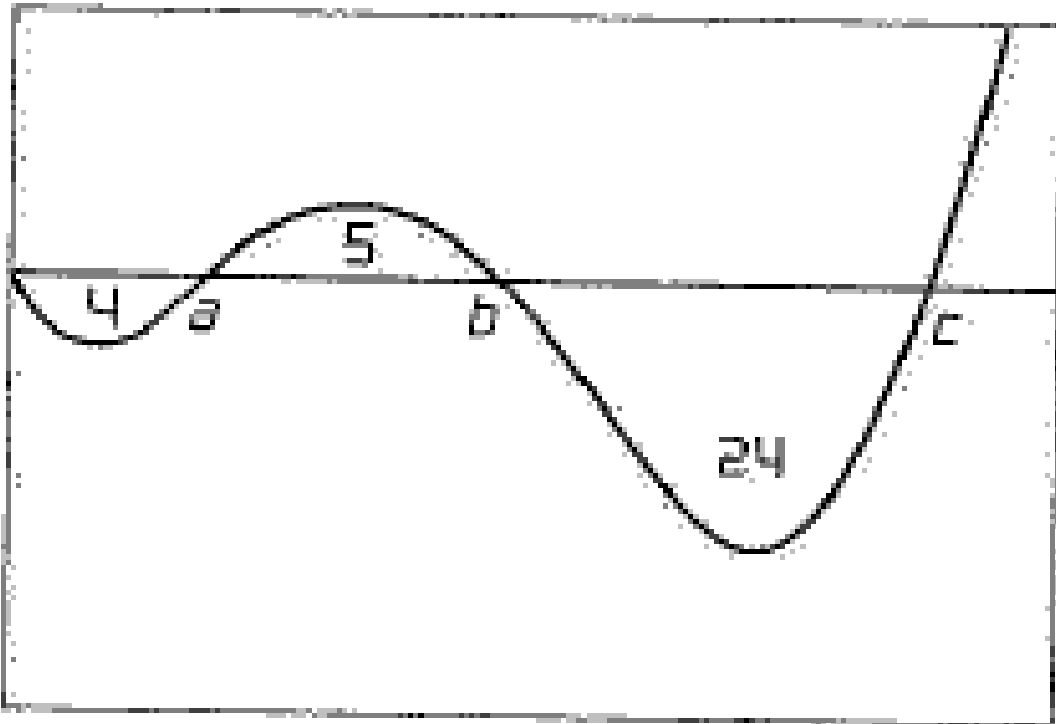
$$v(t) = 6t^2 - 18t + 12$$

$$0 \leq t \leq 2$$

d. Find the total distance traveled by the particle.

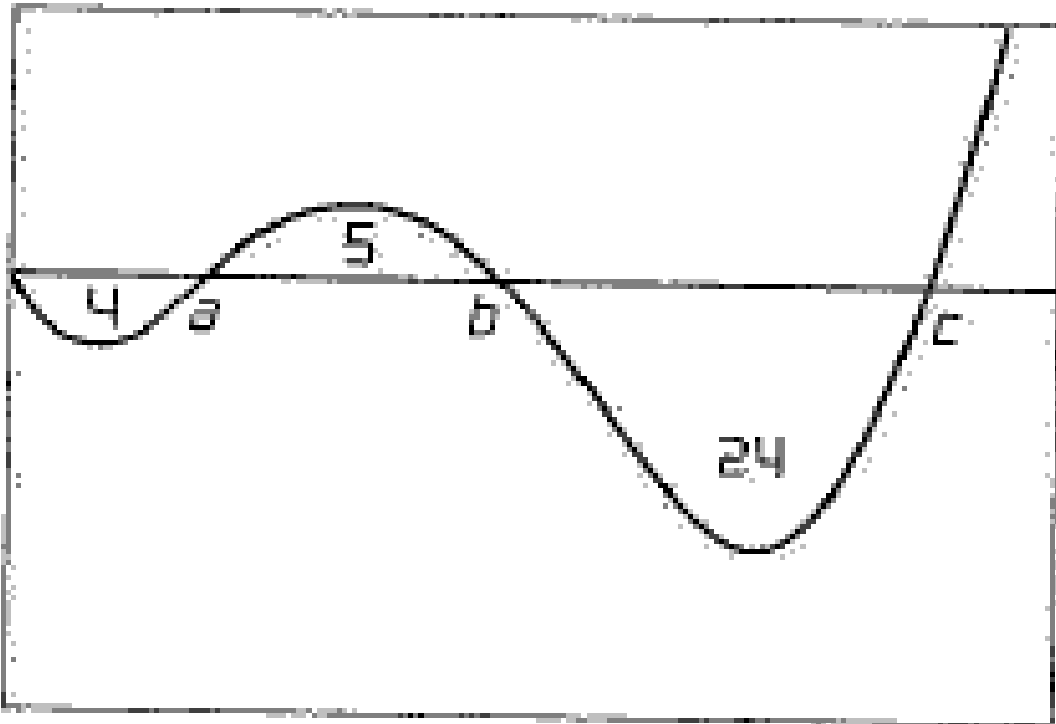
p. 386 #12-16

12. Below is the velocity graph of a function. What is the particle's displacement between $t = 0$ and $t = c$



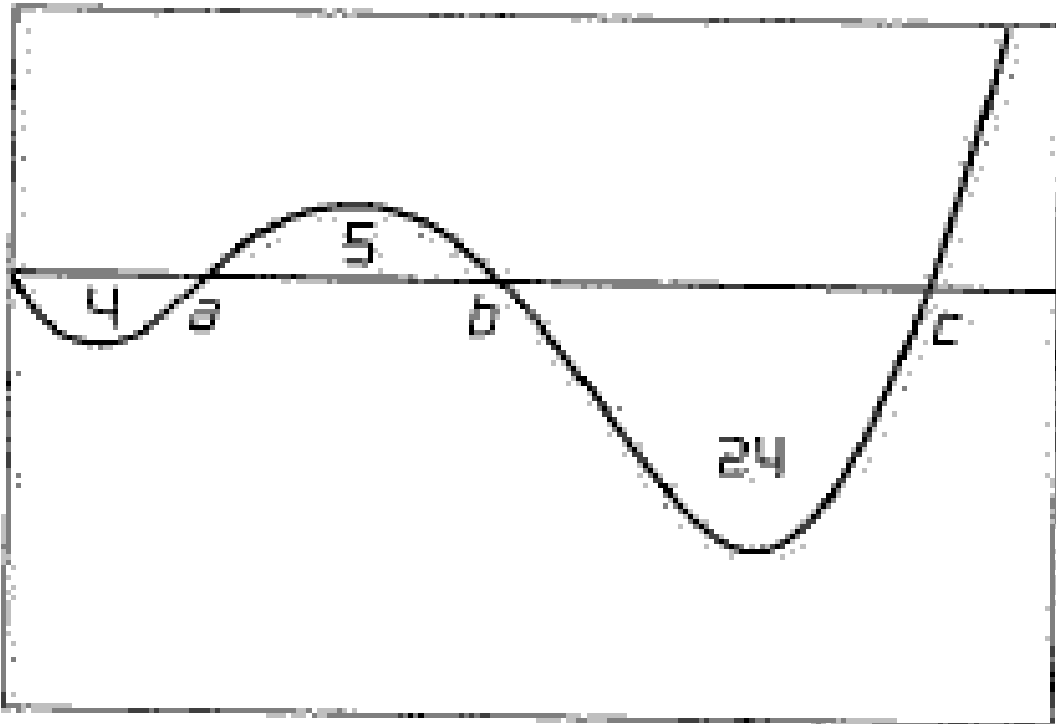
p. 386 #12-16

13. Below is the velocity graph of a function. What is the total distance traveled between $t = 0$ and $t = c$



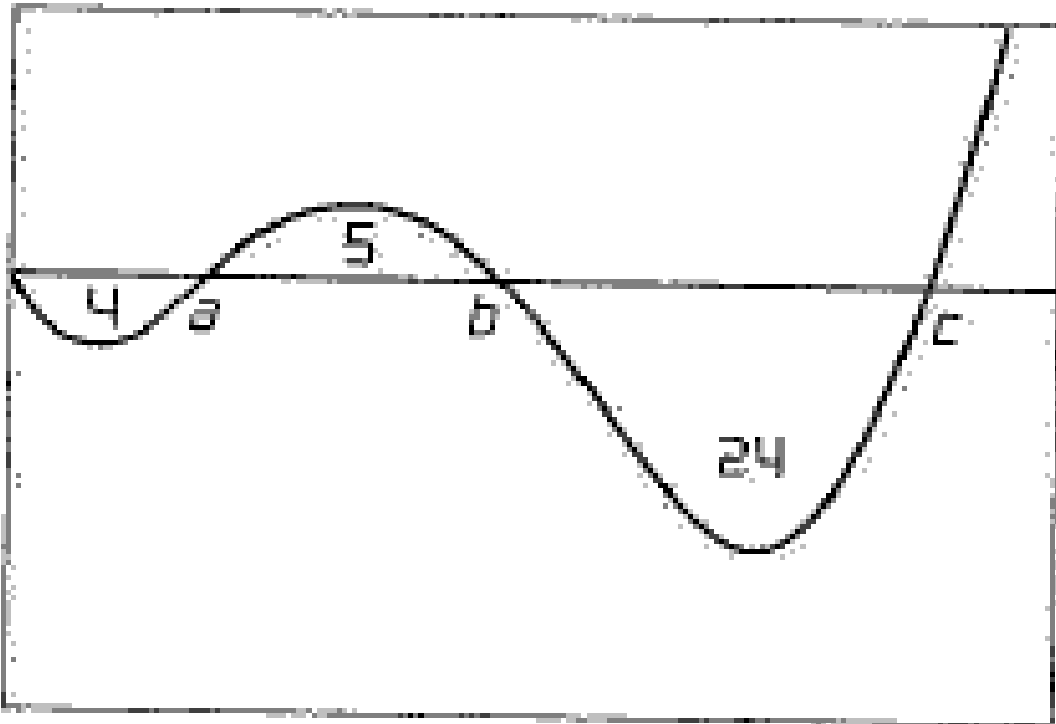
p. 386 #12-16

14. Below is the velocity graph of a function. Give the positions of the particle at times a , b , and c if $s(0) = 15$.



p. 386 #12-16

15. Below is the velocity graph of a function. Approximately where does the particle achieve its greatest positive acceleration on



p. 386 #12-16

15. Below is the velocity graph of a function. Approximately where does the particle achieve its greatest positive acceleration on the

